

PATTERN & MARKING SCHEME

Section	(1) General Awareness	(2) Current Affairs	(3) Life Skills	(4) Achievers Section
No. of Questions	20	5	5	5
Marks per Ques.	1	1	1	2

SYLLABUS

Me and My Surroundings, Plants and Animals, India and the World, Science and Technology, Language and Literature, Earth and Its Environment, Transport and Communication, Sports, Maths Fun, Life Skills (Moral Values, Team Work, Environmental Sensitivity, Communication, Leadership, Time Management), Current Affairs.

Achievers Section : Higher Order Thinking Questions from the above given Syllabus.

1. Grasses are flowering plants that have hollow stems. They are found all over the world. Which of the following is NOT a type of grass?

(A) Bamboo (B) Sugarcane
(C) Wheat (D) Banyan






2. Select the country where the landmark shown in the picture is situated.

(A) China (B) U.S.A.
(C) U.A.E. (D) France



3. Which one of the following is NOT a search engine?

(A)  Netscape (B)  DuckDuckGo (C)  Bing (D)  LYCOS

4. Identify the name of the machine shown in the picture.

(A) Windmill
(B) Solar panel
(C) Elevator
(D) Radar



5. Which country is called 'The Land of the Rising Sun'?

(A) Korea (B) China (C) Japan (D) Vietnam

6. The place where you see the given sign board is _____.

(A) In front of a house (B) In a zoo
(C) On a street (D) Both (A) and (B)



7. Maria Sharapova is known for playing _____.

(A)  (B)  (C)  (D) 

8. _____ is India's tallest minaret.

(A) Taj Mahal (B) Jama Masjid (C) Qutub Minar (D) None of these

ACHIEVERS SECTION

9. Select the INCORRECT match.

(A) Martyrs' Day - 30th January

(B) World Environment Day - 5th June

(C) National Science Day - 28th March

(D) Independence Day - 15th August

10. Name of the asana shown here is _____.

(A) Bhadrasana

(B) Vajrasana

(C) Surya namaskar

(D) Siddhasana



SPACE FOR ROUGH WORK

ANSWERS

1. (D) 2. (B) 3. (A) 4. (A) 5. (C) 6. (B) 7. (C) 8. (C) 9. (C) 10. (B)